

## Model paper -2

### SSC MODEL PAPERS – 2019-20

#### SOCIAL STUDIES (New Model) Paper – 1

#### (GEOGRAPHY & ECONOMICS)

**Time: 2.45 Mts.**

**Marks: 50**

#### Instructions:

- i. 15 Minutes are allotted for reading the question paper in addition to 2.30 hours for writing the answers.
  - ii. All answers should be written in a separate answer booklet.
  - iii. There are four sections in the questions paper.
  - iv. There is an internal choice in Section – IV.
  - v. Answers should be visible and legible.
- 

#### SECTION – 1

#### Note:

- i. Answer all the questions
  - ii. Each question carries  $\frac{1}{2}$  mark.  $12 \times \frac{1}{2} = 06$
- 

1. The west coast of India is divided into three parts.

- Konkan coast
- Malabar coast
- Name the third coast?

2. Find out the odd one out

- Brahmaputra
- Mahanandi

- Godavari
- Krishna

3. Identify the wrong match.

Sandur	-	Mangaese
Kudremukh	-	Bauxite
Kolar	-	Gold

4. Among the following which was not banned in Hiware bazaar.

- Ban on felling rees
- Ban on child marriages
- Ban on liquor

5. Expand “PDS”

6. Which one of the following countries are benefitted more from globalisation?

- Developing countries
- Un- developed countries.
- Developed countries

7.

Area	Haryana	Punjab	AP	Kerala	USA
Sex ratio	879	895	993	1034	1050

What does the table indicates?

8. The fundamental duty of FCI is

- To maintain buffer stocks
- To regulate taxes on farmers
- To control the prices of food grains

9. Which one of the given places is newly announced as a union territory?



10. To which ghats you have to reach to see the birth place of Krishna and Godavari rivers?

11. Western disturbances cause

- Cyclones in Arabian sea
- Low to moderate rainfall over northern India
- Heavy rains in coramandal coast

12. Silent spring was written by -----

## SECTION – II

Note:

i) Answer all the question

ii) Each question carries 1 mark

8X1=8

13. What are dunes? Give one example

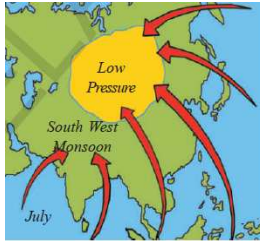
14. what is the difference between weather and Climate?

15. what is Arab Spring?

16. why were usually men paid more wages than women for the some work?

17. Name the two divisions of the peninsular plateau.

18. what do you meant by Sex ratio?
19. See the picture given and say when the south-west monsoons occurred in India?



20. what does ICDS stands for?

### SECTION – III

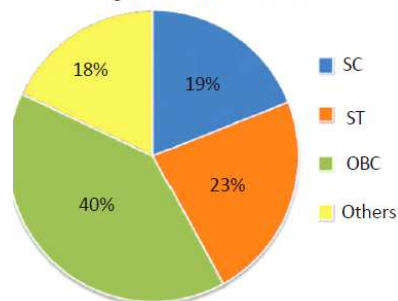
Note:

- i. Answer all the questions
- ii. Each question carries two marks.

8X2=16

21. Write any two measures to eradicate the gender discrimination in the society.
22. What do you learn from schooling revolution in Himacahal Pradesh?
23. study the graph givn below and write your observations.

Pie Chart 1 : Social Background of short term migrants in India, 2007-08

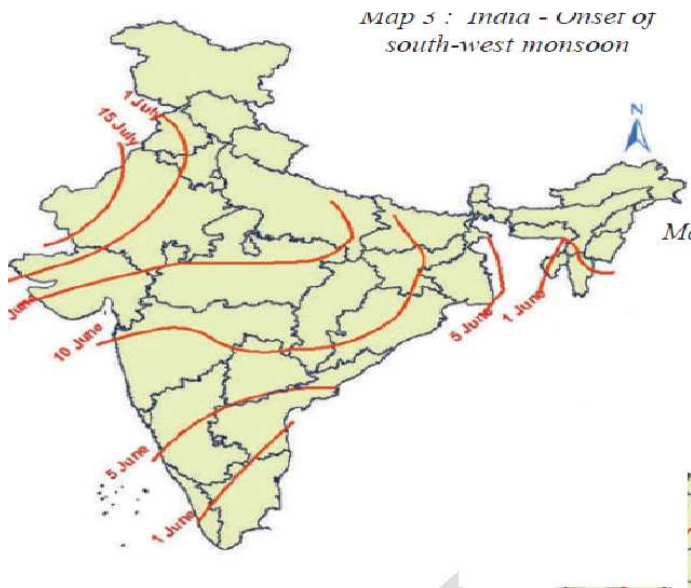


24. which measures do you suggest to improve the employment opportunities in rural area?
25. Fill the table given below.

Hills	States
Jammu hills	
Mishmi hills	
Cachar hills	
Purvancal hills	

26. what are the facilities provided to workers in organised sector?

27. Read the map and answer the following questions.



a) in which state the south-west monsoons enter first?

b) when do the south-west monsoons reach Gujarat?

28. How is environment protection linked with our lifestyle?

## SECTION – IV

Note:

- i. Answer all the questions
- ii. Answer any one from internal choice of each question.
- iii. Each question carries 4 marks. 5X4=20

---

29. write the similarities and differences between East Coastal Plains and West Coastal plains.

or

How small and cottage industries extinct because of multinational companies. Explain with examples,

30. Read the para given below and answer the question

‘If even the idea of what constitutes development can be varied and conflicting then certainly there can be differences about ways of developing.’

Q:support the above statement by taking the example of protest against Kudankulam Nuclear Power project.

or

“Agriculture in India is the gambling of Monsoons” comment on it.

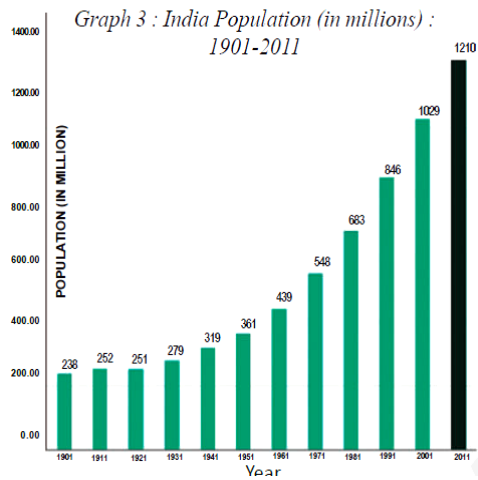
31. suggest to improve labour conditions in unorganised sector,

or

Give solutions to address the urbanisation problems.

32. Read the graph and answer the following questions.

---



- i. In which year did the population decrease?
- ii. From which year onwards is the population continuously increasing?
- iii. why was the population of India increasing after Independence?
- iv. what problems would arise with population explosion?

or

plot the below information on a bar graph. write your observation.

sl.no	state	literacy rate
1	punjab	77
2	himachal pradesh	84
3	bihar	64

33. locate the following in the given map of India

A)

- i. East Coastal plain
- ii) capital city of Maharashtra
- iii) Ooty
- iv) Assm

Or

- B) i. River brahmaputra
- ii) chandigarh
- iv) west coastal plain
- iv. Tamil nadu.